

Second Term Test - 2018


Western Music Grade 07

Time :- 2 hours

Name :-

Underline the correct answer.

1. E to F sharp is a,
(i) Tone (ii) Interval (iii) Semitone (iv) Scale
2. Which of the following answer has written stems correctly?



3. Which of the following time signature is not in Duple time?
(i) $\frac{2}{2}$ (ii) $\frac{3}{4}$ (iii) $\frac{2}{4}$ (iv) $\frac{2}{8}$
4. The time value of semibreve note is,
(i) 8 (ii) 4 (iii) 2 (iv) 1
5. Another name for Kettle drum is,
(i) Snare drum (ii) Fagotto (iii) Timpani (iv) Cor Anglais
6. Which of the following is written correctly.




7. Which of the following is correct.



8. Which of the following is an example for Rounds
(i) Sing a song of six pence (ii) Row Row your boat
(iii) I'm sailing (iv) Tramp Tramp

9. Which note is the highest from all



10. Which of the following has a distance of a tone.



11. The time signature for 4 crotchet beats in a bar will be.

- (i) $\frac{4}{8}$ (ii) $\frac{4}{2}$ (iii) $\frac{4}{4}$ (iv) $\frac{2}{2}$



12. Which of the following is sung during Wesak?

- (i) Bhakthi gee (ii) Carols (iii) Jayamangala Gatha (iv) National Anthem.

13. Name a bird often found singing during the festival season?

- (i) Parrot (ii) Cuckoo (iii) koha (iv) Crow

14. The sign that lowers a note by a semitone is,

- (i) # (ii) b (iii)  (iv) 

15. What kind of a rest is this?



- (i) Semibreve rest (ii) Minim rest (iii) Crotchet rest (iv) Quaver rest

16. A semitone above from 'E' is,

- (i) F sharp (ii) E flat (iii) F (iv) G

17. What is the 3rd line of the F clef?

- (i) B (ii) C (iii) F (iv) D

18. A tone lower from G sharp is,

- (i) F sharp (ii) G (iii) F (iv) E flat

19. The fourth degree of a scale is called.

- (i) Dominant (ii) Sub mediant (iii) Leading note (iv) Sub dominant

20. Waltz is in,

- (i) Duple time (ii) Triple time (iii) Quadruple time (iv) Sub dominant

Answer question no. 1 and Two others.

01. a. Look at the following musical extract & answer the questions.

- (i) How many bars are there in the piece?
- (ii) Where do you find the double bar
- (iii) Explain the time signature (duple, Triple or quadruple)
- (iv) Write the letter names & the time names of the numbered notes as the example given. (3 marks)
- (v) How many minim notes are there in the music.
- (vi) What is the purpose of writing ✓ in several places.
- (vii) Write the meaning of p
- (viii) Rewrite the following music correcting the mistakes.

(10 marks)

02. a. Name the following pair of notes as Tones or Semitones. (4 marks)

b. Select the suitable time signature & write it at the correct place from the given list. (4 marks)

c. Make the following notes as quavers. (2 marks)

Q3. a. Write the following notes as minims. (5 marks)

(i) A on a line

(iv) D flat below the staff

(ii) F sharp in a space

(v) Middle c


(iii) B above the staff



b. Fill in the blanks of the given chart. (5 marks)

| Solfa name | Technical name | Oriental name |
|------------|----------------|---------------|
| Ray | ----- | Ri |
| ----- | Dominant | ----- |
| La | ----- | Da |
| ----- | Tonic | Sa |

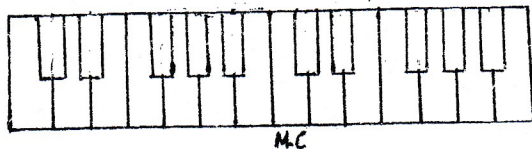
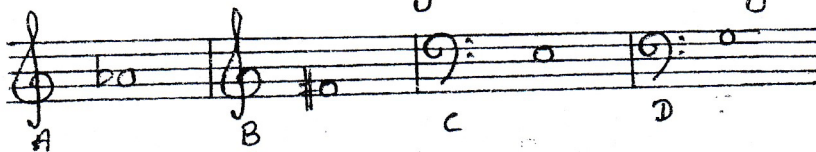
Q4. a. Name the following notes as the example given. (4 marks)



B flat

Minim

b. Number the following notes on the key board below as A, B, C, D (2 marks)



c. Select the composer of the following works as required. (4 marks)

Bach, Handel

(i) Messiah

(ii) St. Mathew's passion

(iii) 48 preludes and fugues

(iv) Water music
