



රිච්මන්ඩ් විද්‍යාලය, ගාල්ල. Richmond College, Galle

දෙවන වාර පරීක්ෂණය - 8 ශ්‍රේණිය 2018

Second Term Test - Grade 8, 2018

Geography I II
භූගෝල විද්‍යාව I II
புவியியல் I II

Two hours
පැය දෙකයි
இரண் மணித்தியாலம்

- Answer all the questions.
- Question (1 - 5) underline the most suitable answer.

01. A country belongs to south Asian region

- (1) Japan (2) America (3) china (4) Sri Lanka

02. North boundary of south Asia

- (1) Indian Ocean (2) Sulaiman mountain
(3) Himalaya mountain (4) Indus river

03. The farthest plant from the sun

- (1) Neptune (2) Saturn (3) Mercury (4) Mars

04. The Earth has been divided into regions or time zones on the basis of longitudes.

- (1) 19 (2) 23 (3) 24 (4) 15

05. A feature of the summer season

- (1) leaves begin to fall (2) longer period of night
(3) flowers will start to bloom (4) Temperature is very high

- Fill in the blanks using words given in the brackets.

06. Extremely cold planet in our solar system is.....

07. is consider as a dwraft planet.

08. is a mountain landscape of Pakistan.

09. A Marshyland located at sealevel is.....

10. The highest mountain peak of the world is

(sundarban, Hindukush, Himalaya, Everest, Neptune, Pluto, Jupiter)

■ Put (√) or (×) for each statement.

11. The small planets which have fixed orbits are known as dwarf planets. ()
12. "Planet 9" is ten times larger than the earth. ()
13. The sun directly over the equator on the 21st of March is called spring equinox ()
14. Afghanistan is a south Asian country. ()
15. The length of Sri Lanka measured from point Pedro to Dondrahead ()

■ 16 – 20 Match(A) with (B).

(A)

16.



17.




18.



19.



20.



(B)

(i) Rural landscape

(ii) Autumn

(iii) Desert landscape

(iv) Coastal landscape

(v) winter season

(2×20 = 40)



PART - II

- First question is compulsory.
- Write another 4 questions.

01. (A) Mark following places in a world map that has given to you.

- | | | | |
|------------------|-------------------|-------------|------------------|
| 01. Arabian sea | 02. Palk strait | 03. Sumatra | 04. Pakistan |
| 05. Gulf of Oman | 06. Bay of Bengal | 07. Nepal | 08. Saudi Arabia |

(B)



- (i) To which country does this flag belong? (i) To which country does this flag belong?
(ii) What is the capital city of above country? (ii) What is the capital city of above country?
(12 marks)


02. (a) What is the planet known as red planet? (03 marks)
(b) Planets can be divided into two categories as inner planets and outer planets. Write 3 outer planets. (03 marks)
(c) What is the planet known as Blue planet. Write three factors about the blue planet (06 marks)

03. (a) Earth has been divided into 24 regions or time zones. Write two countries that extend over several time Zones in the world. (03 marks)
(b) Write three gases in the earth's atmosphere. (03 marks)
(c) Water is very important to the existence of living beings. Describe in 3 ways that can you contribute to prevent water pollution. (06 marks)

04. (a) Name the person in the picture (02 marks)
(b) Which country established "NAZA" ?
Write two duties of the above institution

(04 marks)

- (c) Describe briefly about the planet Jupiter under two factors (06 marks)



05. (a) Write the absolute location of South Asian region (03 marks)
(b) Write two landlocked (does not have coastal belts) countries belongs to South Asian region.

(04 marks)

(c) How many countries belong to SAARC organization? Write 4 countries among them. (05marks)

06. (i) Write two topographic features that can be shown by using contour lines (03 marks)

(ii) Name the following conventional signs.

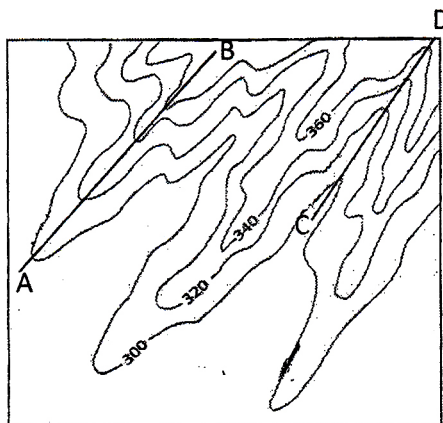
(A) -----

(B) ★

(C) +++++

(03 marks)

(iii) Name following topographic features that represented in map and describe one.



(1) AB

(2) CD

(06 marks)

07. (i) Name two Mongoloid tribal groups live in the Himalaya. (03 marks)

(ii) Write three Human or recreational activities which are specific to the snowy mountainous landscape. (03marks)

(iii) Describe the physical features of the human bodies who have been adapted according to the mountainous physical environment. (06 marks)