




Richmond College – Galle.
Second Term Test – 2019
Western Music



Grade 08

Time : 2 hrs

Name : Index No : Class :

Part I

• **Underline the correct answer.**

1) The leading note of E^b major would be,

- a) B^b b) D^b c) A^b d) D

2) Which of the following composer does not belong to the baroque period?

- a) Scarlatti b) Mozart c) Bach d) Handle

3) The name of the given note is,



- a) A double flat c) B double flat
 b) A double sharp d) G double sharp

4) The rest equal to the dot of the given note is ,



- (a) (b) (c) (d)


5) The major scale that has 4 sharps as its key signature is.


- a) E major b) E^b major c) A^b major d) B major


6) What type of a work is "Fidelio" by L.V. Beethoven?

- a) Oratorio c) Symphony
 b) Chamber Music d) Opera

- 7) The Enharmonic Equivalent of A^{\times} is,
 a) B b) G c) C d) B^b
- 8) What is the nationality of the composer known as "Child Prodigy"?
 a) Italian c) German
 b) Austrian d) Russian
- 9) "දෙවොල් බෙරය" is another name for,
 a) Thammattama c) Yak Beraya
 b) Geta Beraya d) Udekkiya

- 10) The best description for the following notes would be, 
- a) Enharmonic Equivalent
 b) Chromatic Semitone
 c) Tone
 d) Diatonic Semitone

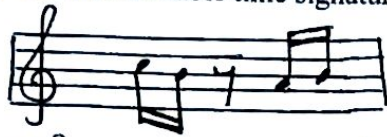
- 11) Which one is a tied note?


- 12) Which of the following is suitable for the given notes?

- a) D,C,G,C b) B,A,B,E c) E,B,A,B d) D,A,G,E

- 13) Who composed "Brandenburg Concertos"?
 a) Beethoven c) Haydn
 b) Bach d) Mozart

- 14) The distance from $A^{\#}$ - F^{\times} is,
 a) 3 semitones c) 9 semitones
 b) 5 semitones d) 8 semitones

15) The most suitable time signature for given music is,



a) $\frac{3}{4}$

b) $\frac{2}{4}$

c) $\frac{3}{8}$

d) $\frac{4}{8}$

16) A bird which is able to imitate cat's "meow" would be,

a) Parrot

c) Common Drongo

b) Grackle

d) Magpie - Robin

17) Which of the following would be an instrument of definite pitch?

a) Bass Drum

c) Side drum

b) Clappers

d) Kettle drum

18) How many tetra chords are there in a scale?

a) 4

b) 3

c) 2

d) 1

19) The open strings of the guitar would be,

a) E,G,B,D,F,A

c) E,B,G,D,A,E

b) E,A,D,G,B,E

d) E,F,G,A,B,C

20) The distance in pitch between two different notes would be a/an,

a) Semitone

b) Tone

c) Interval

d) Scale

(20 marks)

Part II

- Answer question No: 1 which is Compulsory & two others.

1) Observe the given musical score and answer the questions below.

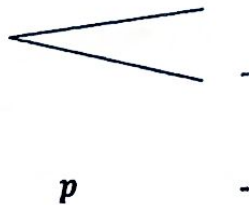
Minuet K.6

W. A. Mozart
(1756 - 1791)

Andante grazioso

p cantabile

- i) Name the key of the melody
- ii) Describe the time signature.
- iii) Give a nickname for the composer of this composition.
.....
- iv) Mention another composition done by W.A. Mozart
.....
- v) Circle a dotted note clearly on the score and mark it with "A".
.....
- vi) Give the letter name of the highest note and state the bar numbers in which it appears.
.....
- vii) Give the meaning of these signs.




viii) Transpose the treble part of bar 5 & 6 one octave lower in the bass clef.



ix) Describe the interval marked in x

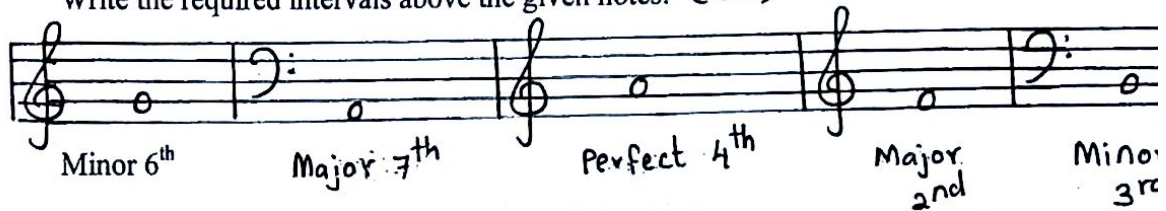
.....

x) Write an enharmonic equivalent to the given note




(10 marks)

2) a) Write the required intervals above the given notes. (5m)




b) Fill these bars with properly grouped rests. (5m)



(10 marks)

3) a) Write the following scales as required.

i) Write in crotchets the major scale which has 3 flats in ascending and descending. Mark semitones. Do not use key signature. (2 1/2m)




ii) Write B major descending in semibreves, with the use of key signature. Mark semitones. Use F clef. (2 1/2m)




b) Write the required notes.




- An Enharmonic Equivalent



- A tone above



- A diatonic Semitone above



- A Chromatic semitone below

(4m)

c) Describe what is a triplet.

(1m)

.....

(10 marks)

4) a) Complete the grid based on history of music.

(6m)

Composer	Year of birth	Nationality	Compositions
J.S. Bach		German	
			Israel in Egypt
	1732	Austrian	
W.A. Mozart			
	1770	German	

b) Give short answers.

(4m)

- i) Alberti bass is a characteristic in period.
- ii) numbered his pieces using the letter "K".
- iii) The four main periods of history of music are termed as,

- iv) "The Harmonius Blacksmith" is a composition by.....

(10 marks)